

M

A

T

E

M

A

T

i

K

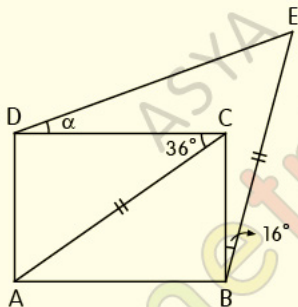
_ DİKDÖRTGEN-KARE

_ TEST1

Dikdörtgen-Kare

Test 1

1.



Şekilde ABCD dikdörtgen,

$$|AC| = |CE|, m(\widehat{DCA}) = 36^\circ, m(\widehat{EBC}) = 16^\circ$$

Yukarıdaki verilere göre, $m(\widehat{CDE}) = \alpha$ kaç derecedir?

A) 19

B) 22

C) 25

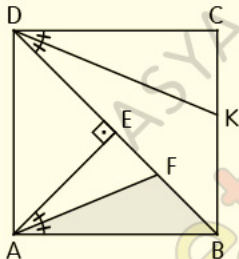
D) 26

E) 27

Dikdörtgen-Kare

Test 1

2.



ABCD kare, $[DK]$ ve $[AF]$ açıortay,

$[AE] \perp [DB]$, $A(DKC) = 26 \text{ cm}^2$

Yukarıdaki verilere göre, $A(ABF)$ kaç cm^2 dir?

A) 13

B) 17

C) $13\sqrt{2}$

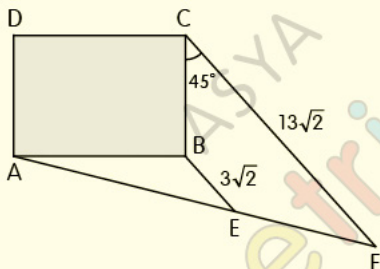
D) 21

E) 23

Dikdörtgen-Kare

Test 1

3.



Şekilde ABCD dikdörtgen,

$[BE] \parallel [CF]$, $2|AE| = 3|EF|$, $|BE| = 3\sqrt{2}$ cm,

$|CF| = 13\sqrt{2}$ cm, $m(\widehat{BCF}) = 45^\circ$

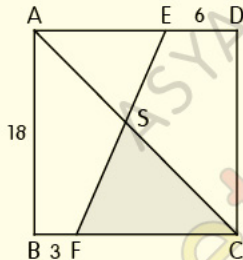
Yukarıdaki verilere göre, $A(ABCD)$ kaç cm^2 dir?

- A) 78 B) 88 C) 90 D) 96 E) 106

Dikdörtgen-Kare

Test 1

4.



ABCD bir kare, $[AC] \cap [EF] = \{S\}$,

$|BF| = 3$ cm, $|ED| = 6$ cm, $|AB| = 18$ cm

Yukarıdaki verilere göre, $A(SFC)$ kaç cm^2 dir?

A) 55

B) 60

C) 65

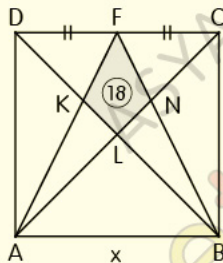
D) 70

E) 75

Dikdörtgen-Kare

Test 1

5.

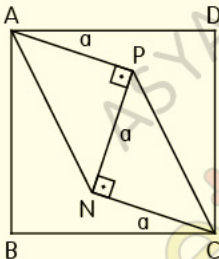


ABCD kare, $|DF| = |FC|$, $A(FKN) = 18 \text{ cm}^2$

Yukarıdaki verilere göre, $|AB| = x$ kaç cm dir?

- A) $3\sqrt{6}$ B) 9 C) $6\sqrt{3}$ D) $6\sqrt{6}$ E) 18

6.



ABCD bir kare, $[AP] \perp [PN]$, $[PN] \perp [NC]$,

$|AP| = |PN| = |NC| = a$ cm

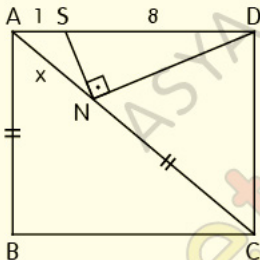
Yukarıdaki verilere göre, $A(ABCD)$ kaç cm^2 dir?

- A) $2a^2$ B) $5a^2/2$ C) $3a^2$ D) $7a^2/2$ E) $4a^2$

Dikdörtgen-Kare

Test 1

7.



ABCD bir dikdörtgen, [AC] köşegen,

$[SN] \perp [ND]$, $|AB| = |BC|$, $|AS| = 1$ cm, $|SD| = 8$ cm

Yukarıdaki verilere göre, $|AN| = x$ kaç cm dir?

A) 1

B) 2

C) 3

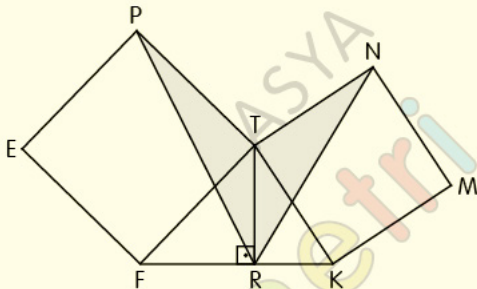
D) 4

E) 5

Dikdörtgen-Kare

Test 1

8.



PEFT ve TKMN birer kare, $[TR] \perp [FK]$,

$$A(PRNT) = 144 \text{ cm}^2$$

Yukarıdaki verilere göre, $ITRI$ kaç cm dir?

- A) 6 B) 9 C) 12 D) 15 E) 18

CEVAP ANAHTARI

Dikdörtgen-Kare Test-1

1-A 2-C 3-D 4-E 5-D 6-B 7-C 8-C

ETİKETLER

matematik test çöz, geometri soru bankası pdf, geometri soru bankası pdf indir, geometri pdf indir, geometri soru bankası çözümleri, matematik pdf, tyt matematik pdf indir, yks matematik pdf indir, matematik test pdf, yks matematik pdf, geometri pdf soru bankası, geometri pdf test, geometri çözümlü sorular pdf, dikdörtgen test pdf, kare test pdf, özel dörtgenler test pdf, yks 2020, yks 2020 pdf, tyt 2020, tyt 2020 pdf, tyt-ayt 2020, dersimiz, dersimiz geometri, asya geometri, ali selim yaman